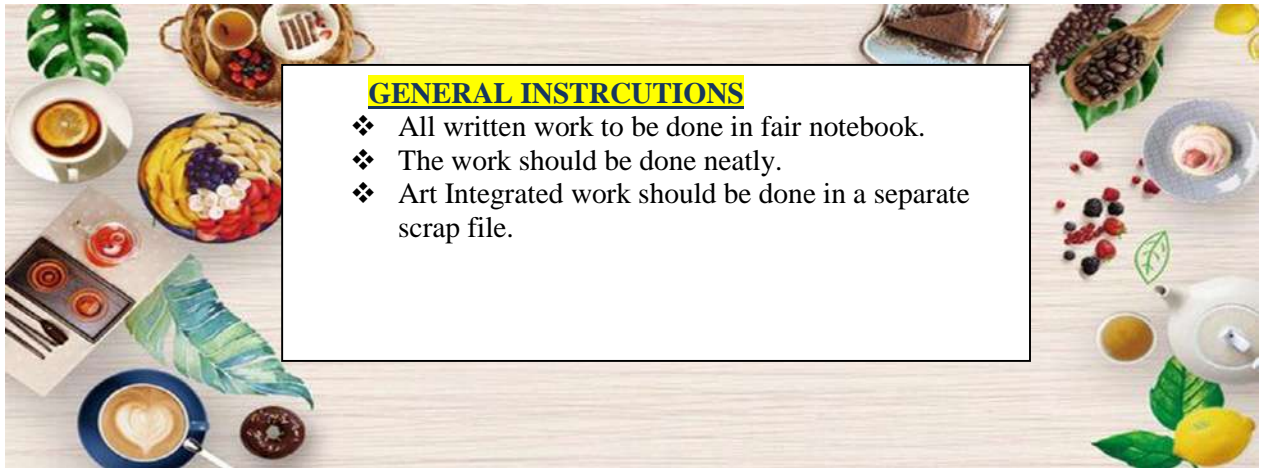


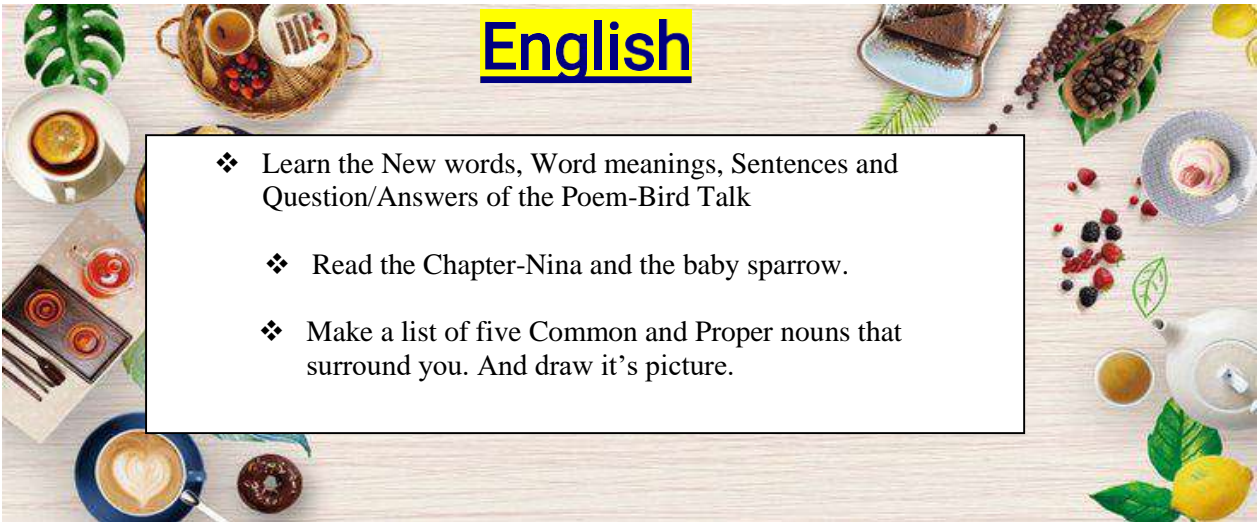


**Shivalik Public School Mohali**  
**Summer Holidays Homework**  
**Class – III**



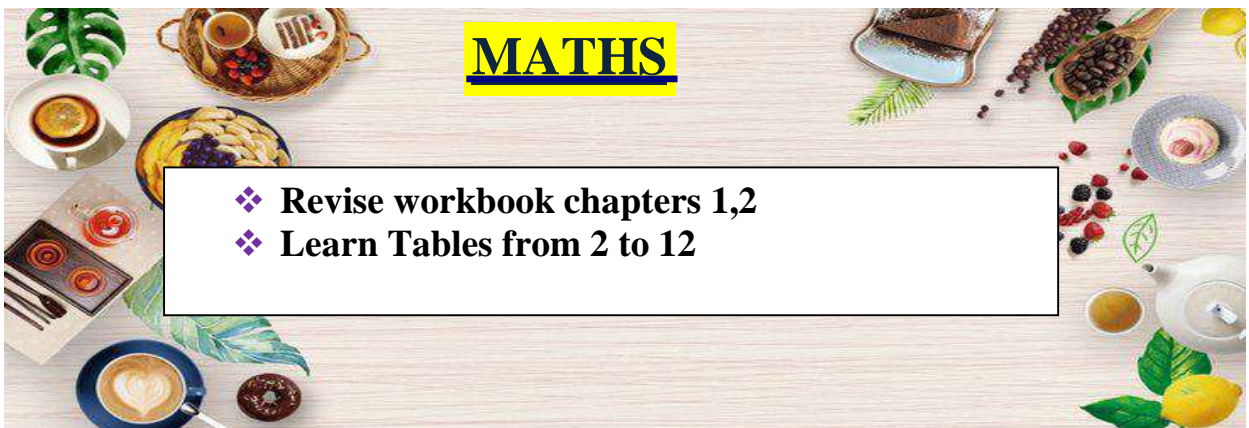
**GENERAL INSTRUCTIONS**

- ❖ All written work to be done in fair notebook.
- ❖ The work should be done neatly.
- ❖ Art Integrated work should be done in a separate scrap file.



**English**

- ❖ Learn the New words, Word meanings, Sentences and Question/Answers of the Poem-Bird Talk
- ❖ Read the Chapter-Nina and the baby sparrow.
- ❖ Make a list of five Common and Proper nouns that surround you. And draw it's picture.



**MATHS**

- ❖ **Revise workbook chapters 1,2**
- ❖ **Learn Tables from 2 to 12**

## Hindi-

- 10 पेज सुलेख लिखो ।
- कक्कू कविता याद करिए व लिखिए।
- दिनों के नाम लिखें ।
- बरसात के मौसम का चित्र बनाकर उसके बारे में पांच पंक्तियां लिखें।

## E.V.S

- ❖ Learn chapter 1 , 2 , 3 and 4.
- ❖ Read Chapter 5 and 6

## PUNJABI-

- ❖ ਪੰਜ (five)ਪੰਨੇ ਸੁਲੇਖ(calligraphy) ਦੇ ਲਿਖੋ
- ❖ ਵਰਨ ਮਾਲਾ ਓ ਤੋਂ ਲ ਤੱਕ ਯਾਦ ਕਰੋ ਤੇ ਪੰਜ ਵਾਰ ਲਿਖੋ ।
- ❖ ਸਿਹਾਰੀ ਅਤੇ ਬਿਹਾਰੀ ਮਾਤਰਾ ਵਾਲੇ ਸ਼ਬਦ ਯਾਦ ਕਰੋ ਅਤੇ ਲਿਖੋ। ਕੋਈ ਪੰਜ ਸਿਹਾਰੀ ਵਾਲੇ ਸ਼ਬਦ ਦੀਆਂ ਤਸਵੀਰਾਂ ਬਣਾਓ।





# Art- Integrated

## ENGLISH

- a) Write any one famous recipe of the state Punjab and Odisha. And paste picture of it.
- b) Paste any two pictures of costumes that are mostly worn by the people of Punjab and Odisha

## MATHS

Find the numbers in English Alphabets for the following traditional costumes of Punjab and Odisha. Add them to make 2 digit number.

Costume of Odisha

1. Dhoti and kurta                      2. Saree

Costume of Punjab

1. Kurta pajama                      2. Salwar kameez

For example – D H O T I

$$4 + 8 + 15 + 20 + 9 = 56 = 5 + 6 = 11 \quad \text{Ans 11}$$

LETTERS NUMBERS ALPHABET  
CHART ORDER 26 AZ ENGLISH

A	B	C	D	E	F	G	H	I	J
1	2	3	4	5	6	7	8	9	10
K	L	M	N	O	P	Q	R	S	T
11	12	13	14	15	16	17	18	19	20
U	V	W	X	Y	Z				
21	22	23	24	25	26				

## HINDI

□□ पंजाब और उड़ीसा राज्य के भोजन और पहनावे से संबंधित कुछ पंक्तियाँ लिखे तथा चित्र भी चिपकाए। (ON DESIGNER SHEET)

## E.V.S

Draw /Paste any Two food items and Costumes of the State of Punjab and Odisha on A-4 sheet

**\*Activity\***

\* Observe any 3 animals in your surrounding (ants, lizard, bee, dog, birds etc.) and draw them.

Also write any one thing that you observed about them.

## PUNJABI

ਪੰਜਾਬ ਤੇ ਉੜੀਸਾ ਦੇ ਫਲਾਂ ਦੇ ਨਾ ਲਿਖੋ ਅਤੇ ਯਾਦ ਕਰੋ।(on coloured A4 sheet)

## **ENGLISH GRAMMAR WORKSHEET**

### **DO AS DIRECTED:**

1. My mother is a teacher. (**Underline the nouns**)
2. My brother is a well-known dentist. (**Underline the Common noun in this sentence.**)
3. My father is a \_\_\_\_\_. (**Fill in the blank with appropriate noun**)
4. I saw many \_\_\_\_\_(turkey) in the farm. (**Change the word in the bracket with plural noun**)
5. A girl is eating ice cream. (**Underline the nouns**)
6. Stilton is a good writer. (**Underline the common noun and circle the proper noun in the sentence.**)
7. Ayush left his cricket kit at my house. (**Underline the common noun and circle the proper noun in the sentence.**)
8. My aunt is a nice lady. (**Underline the common noun and circle the proper noun**)
9. They are going to the lotus temple. (**Underline the proper nouns**)
10. Bees (**Write the two rhyming words of the bees**)
11. Soham wants to go to \_\_\_\_\_. (Fill in the blank with appropriate noun)
12. Shelf- \_\_\_\_\_ (**Write the Plural form of shelf**)
13. Day (**Write the rhyming word of the words**)
14. Sheep (**Change the word into Plural form and frame a sentence with help of that word.**)
15. The farmer is in the \_\_\_\_\_. (**Fill in the blank with appropriate noun**)
16. Mother is baking a cake in the oven. (**Underline the noun**)
17. The driver is driving the \_\_\_\_\_. (**Fill in the blank with appropriate noun**)
18. My grandparents live in Bihar. \_\_\_\_\_. (**Write whether the underlined word in the sentence a common noun or a proper noun.**)
19. Tooth- \_\_\_\_\_ (**Write the Plural form of tooth**)
20. Ganga is a holy river. (**Underline the proper nouns**)
21. I live in \_\_\_\_\_. (**Fill in the blank with appropriate noun**)
22. Taj Mahal is situated in city Agra. (**Circle the proper nouns and**

**underline the common nouns.)**

23. Butterfly - \_\_\_\_\_ (Write the Plural form of Butterfly)

**24. Read the following paragraph and answer the questions:**

Trees are plants. Trees are the largest plants on the Earth. Trees have four main parts. The parts are the trunk, branches, leaves and roots. Roots help to keep trees healthy. Roots keep the tree in place. Roots carry water and food. The trunk is the body of the tree. It is covered with bark. The bark protects the tree. The trunk carries water from the roots. Branches grow from the trunk. Branches carry food from the leaves. Leaves grow on branches. Leaves turn sunlight into food. This is called photosynthesis. Leaves change carbon di oxide into oxygen. Humans and animals breathe oxygen.






**1. Fill in the blanks:**

- a) Trees are \_\_\_\_\_.
- b) Trees have \_\_\_\_\_ main parts.

**2. True/ False:**

- a) Branches grow from the leaves.
  - b) Bark protects the tree.
3. Write the antonym of 'Largest'.
4. What does the trunk carry from the roots?
5. What do humans and animals breathe?

**25. Rearrange the jumbled words-**

	trletu	_____
	geriaff	_____
	cleyc	_____
	tbael	_____
	cthaw	_____



Sr. No.	Questions	Answers
1	10 more than 15	
2	9 times 8	
3	Successor of 35	
4	$18 + 2$	
5	How many 8's are there in 16?	
6	Double of 4	
7	Find the next number: 59, 55, 60, __	
8	Predecessor of 88	
9	Rupee 1 = __ paise	
10	$3 \times \_ = 21$	
11	1 more than 10	
12	5 less than 15	
13	Short form of $100 + 30 + 4$	
14	Take away 15 from 35	
15	$465 = \_ + \_ + \_$	
16	How many 10's are there in 100?	
17	85 comes just after __.	
18	Count: $100 + 100 + 10 + 10 + 1 + 1$	
19	$99 - 9$	
20	$\_ \times 4 = 16$	
21	$600 + \_ \times 10 + 3 = 623$	
22	Find the next number: 10, 20, 30, __	
23	Twice of 5 is	
24	$16 + 4$	
25	5 7	
26	$77 - 17$	

27	20 more than 30	
28	9 times 9	
29	Take away 12 from 36	
30	6 times 6	

## E.V.S WORKSHEET

Q. 1- Write name of two animals that found in ponds?

Q. 2- Write name of two animals having a tail?

Q. 3- Who am I-

Banana is what I love eating.

I spend my time jumping and leaping

Q. 4- Draw a picture of an animal that you have seen?

Q. 5- Name two animals that do not live in your house?

Q. 6- Draw a picture of leaf that occurs in your surrounding.

Q. 7- Name any one object which have patterns of leaves and flowers on them in your house.

Q. 8- Name any plant that you have heard of but never seen.

Q. 9- Name the plants having smell in their leaves.

Q. 10- Name two activities for which water is needed.

Q. 11- Name any two sources of water.

Q. 12- Why do we need to store water?

Q. 13- Draw picture of any container which is used for storing water in your house.

Q. 14- Put a circle around one that is different from the others.

fish, duck, monkey, crocodile, tortoise

Q. 15- Name any activity which you can do without water.

Q. 16- Write names of your family members and their relationship with you.

Q. 17- Name any particular work which is done by your family.

Q. 18- How do you help the family with the work?



Q. 19- Fill in the blanks.

When I want to know about the past I go to my .....

Q. 20- Which practices you and your family do keep your house and the surroundings clean.

## **Reasoning worksheet-**

1. A class collected seven hundred fourteen box tops. Which number represents seven hundred fourteen?

(A) 704 (B) 714 (C) 740 (D) 741

2. What is the standard form of  $7,000 + 800 + 20 + 5$ ?

(A) 7,285 (B) 7,825 (C) 7,852 (D) 7,528

3. The students count 149 balls in the gym. What is another way of writing the number of balls in the gym?

(A) Fourteen nine (B) One forty nine (C) One hundred forty nine (D) One hundred fourteen nine

4. Which place value is used to prove that 5,487 is less than 5,874?

(A) Ones place (B) Tens place (C) Hundreds place (D) Thousands place

5. What property of addition will help you find the answer to the problem:  $6 + 0 = ?$

(A) Zero plus any number equals zero

(B) Zero plus any number equals that number

(C) Zero minus any number equals that number

(D) Zero minus any number equals zero

6. Sara and 3 of her friends together made a poster. They drew 8 rows of squares with 6 squares in each row.

How many squares did Sara and her friends draw on the poster?

(A) 48 (B) 42 (C) 40 (D) 17

7. Komal built a birdhouse at summer camp. What shape is the piece of wood that was cut out to make the door of his birdhouse?

(A) Triangle (B) Diamond

(C) Circle (D) Pentagon

8. Mrs. Ryan shows her class two groups of shapes. Then she asks, "Which rule was used to sort these shapes into groups?"

(A) Large things and small things

(B) Triangles and squares

(C) Circles and figures with 4 sides

(D) Triangles and figures with four sides

9. If Pawan has baseball practice every fourth day in the month of March, starting with March 1, what date will be his last day of practice for the month?

(A) March 28

(B) March 29

(C) March 30

(D) March 31

10. Third grade students went to a theatre in 8 buses. Each bus took 45 students. How many students went

to the theatre?

(A) 320 (B) 360 (C) 380 (D) 3240