

SHIVALIK PUBLIC SCHOOL ,MOHALI

CLASS III

SUBJECT -EVS

UNIT 6 CHAPTER - 13

WORKSHEET -1

Q1. DEFINE (keywords)

- 1. Sharing**
- 2. Anxious**
- 3. Blindfold**
- 4. food**
- 5. medicinal
plants**
- 6. toothache**

Q2. Fill in the blanks

- a. Ravi bhaiya has a good sense of humour because he makes us ____.**
- b. Louis Braille lost his eyesight because a _____ tool hurt his eyes.**
- c. The Braille script is based on ____points**
- d. We get sugar from_____ .**
- e. We eat the _____ of a cabbage plant.**
- f. Lemons are the _____ of a plant.**

Q3. True / False

- (i) Ravi bhaiya teaches in a secondary school.**
- (ii) Louis Braille belonged to France .**
- (iii) In Rani's family his father helps her mother.**
- (iv) If You have cough and cold, you can have ajwain.**

(v) We obtain Honey from plants. False

Q4. SHORT ANSWER QUESTIONS

- 1. When we are blindfolded, how can we recognize others?**
- 2. Who first thought of Braille books?**
- 3. How are medicinal plants useful to us?**

Q5. LONG ANSWER QUESTIONS

- 1. Why do blind people carry a white stick when moving out of their homes?**
- 2. Why do blind people wear sunglasses all the time?**
- 3. Do you help in the house hold work? How?**

SHIVALIK PUBLIC SCHOOL ,MOHALI

CLASS III

SUBJECT -EVS

UNIT 6 CHAPTER - 13

WORKSHEET -1

Q) DEFINE (keywords)

1. Sharing : to divide something between two or more people

2. Anxious : worried and afraid

3. Blindfold : a piece of cloth, etc. that is used for covering somebody's eyes

4.food- a thing that human beings and animals eat.

5.medical plants- a plant or herb which can cure your illness.

6. toothache- pain in a person's teeth.

Q2 Fill in the blanks

a. Ravi bhaiya has a good sense of humour because he makes us **Laugh.**

b. Louis Braille lost his eyesight because a **pointed** tool hurt his eyes.

c. The Braille script is based on **six** points

d. We get sugar from sugarcane .

e. We eat the leaves of a cabbage plant.

f. Lemons are the fruit of a plant.

Q True / False

(i) Ravi bhaiya teaches in a secondary school. **(False)**

(ii) Louis Braille belonged to France .**(True)**

(iii) In Rani's family his father helps her mother. **False**

(iv) If You have cough and cold you can have ajwain. False

(v) We obtaine Honey from plants. False

Q SHORT ANSWER QUESTIONS

1. When we are blindfolded, how can we recognize others?

Ans. By touching and feeling others.

2. Who first thought of Braille books?

Ans. Louis braille

3. How are medicinal plants useful to us?

Ans- Medicinal plants helps to cure diseases like cough and cold. They help in relieving the pain.

Q LONG ANSWER QUESTIONS

1. Why do blind people carry a white stick when moving out of their homes?

Ans. So that they can touch and feel any object that comes in their way with the stick while walking.

2. Why do blind people wear sunglasses all the time?

Ans. To protect their eyes from sunlight and also to notify other.

3. Do you help in the house hold work? How?

Ans. Yes, I help in the house hold work.I help in -

1. dusting
2. Keeping my things at proper place.
3. Watering the plants.

SHIVALIK PUBLIC SCHOOL

PH-6, MOHALI

WORKSHEET-2

CLASS III

SUBJECT- E.V.S

UNIT-7

TOPIC- Making Pots, Games We Play

Q1. Define the following-

1. Blacksmith
2. Hop-Scotch
3. Potter
4. Outdoor Games

Q2. Fill in the blanks-

1. To make pots, we first _____ the clay to make a big ball.
2. Rajat wanted to play with _____.
3. The pots are baked in a _____.
4. Games keep us physically and mentally _____.

Q3. Write True or False-

1. Winning and losing is the part of game.
2. Phudgudi asked the crow to have a bath in river.
3. We should tease our friends while playing.
4. Potter wanted clay from the clay- pit.

Q4. Choose the correct option-

1. Baking the pots makes them____.
a) Weaker b) stronger c) heavier d) smaller

2. How many eggs did the sparrow lay?
a) Two b) three c) one d) five

3. How many cards are there in deck of cards?
a) 56 b) 52 c) 51 d) 50

4. A Potter needs_____ to make a pot.
a) clay b) a potter's wheel c) water d) all of these

Q5. Match the following-

1. Carpenter	a) Shuttle cock
2. Badminton	b) Wooden furniture
3. Goldsmith	c) Dice
4. Ludo	d) Gold ornaments

Q6. Very Short Answer Type Questions-

1. In the story, who was Bhanate?
2. Which is the national game of India?

3. In the story, who was Phudgudi?
4. Name any one outdoor game.

Q7. Short Answer Type Questions-

1. How many players are there in Cricket team?
2. Write any two things made up of clay.
3. How many people can play Carrom?
4. What does a cobbler do?

Q8. Long Answer Type Questions-

1. Who all helped the crow to make the pot?
2. Name the games that you like to play inside your house.
3. Write any two uses of pot.

Q9. Give Reasons-

1. How can you play a fair game?
2. Why did the crow need a pot?

Q10. Diagram-

1. Draw any 2 equipments of indoor games.

SHIVALIK PUBLIC SCHOOL

PH-6, MOHALI

WORKSHEET-2

CLASS III

SUBJECT- E.V.S

UNIT-7

TOPIC- Making Pots, Games We Play

ANSWER KEY

Q1. Define the following-

5. **Blacksmith-** a person who makes and repairs things made of iron.
6. **Hop Scotch-** a game which involves jumping between squares which are drawn on the ground.
7. **Potter-** a person who makes pots.
8. **Outdoor Games-** the games which are played outside the house are called outdoor games.

Q2. Fill in the blanks-

5. To make pots, we first knead the clay to make a big ball.
6. Rajat wanted to play with the doll.
7. The pots are baked in a kiln.
8. Games keep us physically and mentally healthy.

Q3. Write True or False-

5. Winning and losing is the part of game. **True**
6. Phudgudi asked the crow to have a bath in river. **False**
7. We should tease our friends while playing. **False**
8. Potter wanted clay from the clay- pit. **True**

Q4. Choose the correct option-

5. Baking the pots makes them____.
b) Weaker **b) stronger** c) heavier d) smaller
6. How many eggs did the sparrow lay?
b) Two b) three **c) one** d) five
7. How many cards are there in deck of cards?
a) 56 **b) 52** c) 51 d) 50
8. A Potter needs_____ to make a pot.
d) clay b) a potter's wheel c) water **d) all of these**

Q5. Match the following-

3. Carpenter	e) Wooden furniture
4. Badminton	a) Shuttle cock
5. Goldsmith	d) Gold ornaments
6. Ludo	c) Dice

Q6. Very Short Answer Type Questions-

3. In the story, Bhanate was a crow.
4. Hockey is the national game of India.
5. In the story, Phudgudi was sparrow.
6. Football.

Q7. Short Answer Type Questions-

2. There are 11 players in the Cricket team.
4. Two things made up of clay are flower pot and kulhad.
5. 4 people can play Carrom.
5. Cobbler mends the shoes.

Q8. Long Answer Type Questions-

4. The blacksmith, the clay pit and the potter helped the crow to make the pot.
5. The games that we like to play inside your house are

Ludo, carrom, chess.

6. The two uses of pot are:-

a) For storing water.

b) For making food.

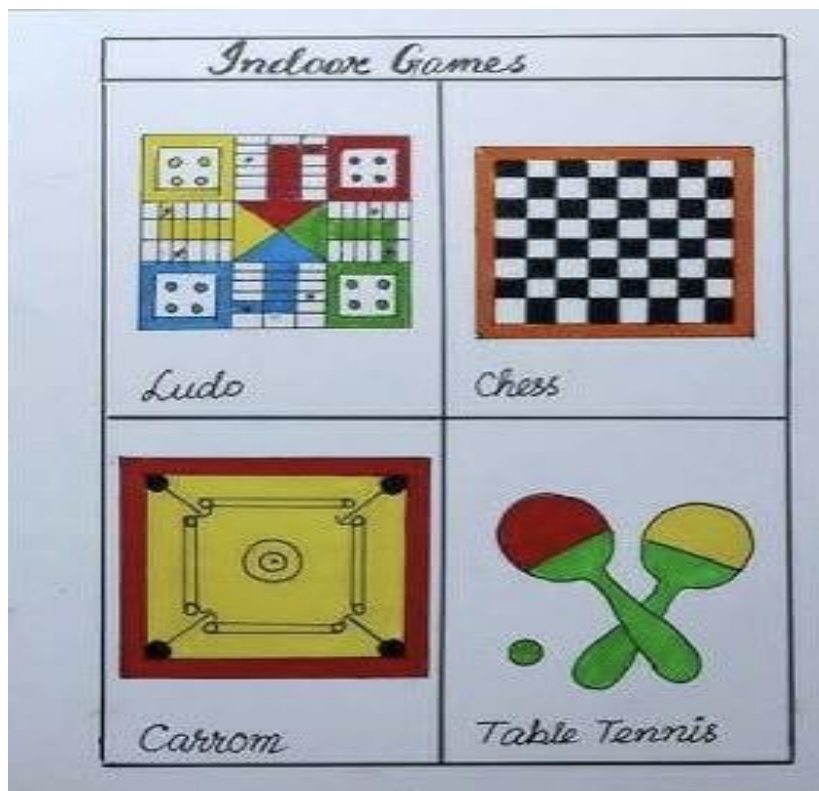
Q9. Give Reasons-

3. We can play a fair game by following games rules.

4. The crow needed a pot to get water to wash his beak.

Q10. Diagram-

2. Draw any 2 equipments of indoor games.



SHIVALIK PUBLIC SCHOOL, MOHALI
WORKSHEET-3
UNIT-8
CLASS-III
SUBJECT- E.V.S

Q1 Define the following-

- 1) Letter-
- 2) Communication-
- 3) Igloo-
- 4) Pucca House-

Q2 Fill in the blanks-

1. Most people use _____ to go up in multi-storeyed buildings.
2. _____ is a type of house which floats on water.
3. In earthquake prone areas houses are made of _____.
4. E-mail means _____ mail.
5. Letters are put in a _____ for being sent.

Q3 True or False-

- 1) Ahmed lives in Agartala.
- 2) Letters cannot be delivered in hilly areas.
- 3) Rainfall is very scarce in Rajasthan.
- 4) It rains heavily and snows as well in Manali.
- 5) New Delhi is the capital of India.

Q4. Match the following-

- | | |
|-----------------|-------------------------|
| 1. Telephone | a) Igloo |
| 2. Assam | b) Mass Communication |
| 3. Television | c) Verbal Communication |
| 4. Polar region | d) Bamboo pillars |

Q5. Choose the correct option-

1. Color of postal van is _____.
a) black b) blue c) red
2. Houses in hilly areas are made up of _____.
a) Wood and Stone b) Canvas c) Plastic d) Mud

3. Which is the cheapest means of postal communication?

- a) Inland letter b) Post card c) Parcels

4. Houses with thick walls and high roofs are found in_____.

- a) Srinagar b) Rajasthan c) Goa d) Tamil Nadu

5. House boat is also known as

- (a) House on wheels (b) Shikara (c) Pucca house (d) Kutcha house

Q6 Short Questions-

- a) What works are done in post office?
b) How is a houseboat different from other houses?
c) Name any two things that you can buy at post office.

Q7 Long Answer Questions-

- a) How does a letter reach its destination?
b) What are the different means of communication?

Q8 Give reasons-

- a) Why do people of Assam live in houses built on stilts?
b) Why do houses in hilly areas have slanting roofs?
c) Why do we need house?

Q9 Diagram-

- a) Draw any two types of house

SHIVALIK PUBLIC SCHOOL, MOHALI
WORKSHEET-3
UNIT-8
CLASS-III
SUBJECT- E.V.S (Answer key)

Q1 Keywords-

- a) Letter- a written or printed communication.
- b) Communication- sharing of information or ideas.
- c) Igloo – The house which is made up of snow is called Igloo.
- d) Pucca house – The house which is made up of cement, stones, iron and bricks is known as pucca house.

Q2 Fill in the blanks-

- 1) Lifts
- 2) Houseboat
- 3) Wood
- 4) Electronic
- 5) Post box

Q3 True or False-

- 1) False
- 2) False
- 3) True
- 4) True
- 5) True

Q4 Match the following-

- | | |
|-----------------|-----------------------------|
| 1. Telephone | a) Igloo (4) |
| 2. Assam | b) Mass Communication (3) |
| 3. Television | c) Verbal Communication (1) |
| 4. Polar region | d) Bamboo pillars (2) |

Q5. Choose the correct option-

- 1. Color of postal van is _____.
- a) black b) blue **c) red**
- 2. Houses in hilly areas are made up of _____.

a) **Wood and Stone** b) Canvas c) Plastic d)
Mud

3. Which is the cheapest means of postal communication?

a) Inland letter **b) Post card** c) Parcels

4. Houses with thick walls and high roofs are found in_____.

a) Srinagar **b) Rajasthan** c) Goa d) Tamil Nadu

5. House boat is also known as

(a) House on wheels **(b) Shikara** (c) Pucca house (d) Kutcha house

Q6 Short Questions-

- 1) Stamping and sorting of letters are done in post office.
- 2) A houseboat floats on water whereas other houses are built on ground.
- 3) Stamps and post cards.

Q7 Long Answer Questions-

- 1) The postman of the area receives the letters and delivers them to person addressed.
- 2) Different means of communications are telephone, television, newspaper, letter and radio.

Q8 Give reasons-

- 1) As it rains heavily in Assam, so people live in stilt houses to prevent water entering into rooms.
- 2) Houses in hilly areas have slanting roofs to allow snow and rain to flow downwards easily.
- 3) We need a house to live in as it protects us from heat, cold, rain, snow, animals and enemies.

SHIVALIK PUBLIC SCHOOL

PH-6, MOHALI

WORKSHEET-4

CLASS III

SUBJECT-E.V.S

UNIT-9

TOPIC- Our Friends Animal, Drop by Drop, Families Can be Different

Q1. DEFINE THE FOLLOWING:-

1. Blister
2. Scarcity
3. Ancestral
4. Flapping

Q2. FILL IN THE BLANKS:-

1. We can see ___ all around in Rajasthan.
2. Family members _____ one another in the family.
3. Navjot and Ali brought _____ in a bowl for the injured bird.
4. The bird hurt itself with the _____.

Q3. TRUE OR FALSE:-

1. Meenakshi had adopted Tara.
2. Chandu Dhobi took good care of donkey.
3. Shankar had started spending his free time with the puppies.

4. We pay tax for water so we can waste it as we like.

Q4. CHOOSE THE CORRECT OPTION:-

1. Kaveri plays carrom with her _____.

a) sister b) brother c) father d) mother

2. Rainwater can be collected in _____.

a) drums b) buckets c) tanks d) all of these

3. Father's father is our _____.

a) grandfather b) uncle c) cousin d) brother

4. Animals such as camel and _____ help us to carry loads.

a) Lion b) Tiger c) Donkey d) None of these

Q5. MATCH THE FOLLOWING:-

1. Plants and animal a) water purifier

2. Totaram b) Bamboo pillars

3. Cleaning water c) depend upon each other

4. Polar region d) studies in Mumbai

Q6. Very Short Answer Type Questions:

1. Who fetches water in Madho's house?

2. Name any two wild animals.

3. Where does Kaveri go in vacations?

4. What is a family?

Q7. Short Answer Type Questions:

1. Name some functions that we celebrate and enjoy in family.
2. Name any two uninvited animals in our house.
3. From where do the people in Madho's village fetch water?
4. What do you mean by Graze?

Q8. Long Answer Type Questions:

1. Why does the roof of house is made sloping?
2. What are domestic animals?
3. What are the different ways of saving water?

Q9. Give Reasons:

1. What are the things needed by human beings and animals to live?
2. What do we learn from our family?

Q10. Diagrams:-

1. Draw any 1 pet animal.
2. Draw a poster and write a slogan on 'Save Water'.

SHIVALIK PUBLIC SCHOOL

PH-6, MOHALI

WORKSHEET-4

CLASS III

SUBJECT-E.V.S

UNIT-9

TOPIC- Our Friends Animal, Drop by Drop, Families Can be Different

ANSWER KEY

Q1. DEFINE THE FOLLOWING:-

3. **Blister-** a small bubble on the skin caused due to burning or other damage.
4. **Scarcity-** the state of being scarce are in short supply
5. **Ancestral-** relating to members of your family from the past.
6. **Flapping-** to move (wings or arms) up and down.

Q2. FILL IN THE BLANKS:-

5. We can see **sand** all around in Rajasthan.
6. Family members **resemble** one another in the family.
7. Navjot and Ali brought **water** in a bowl for the injured bird.
8. The bird hurt itself with the **fan**.

Q3. TRUE OR FALSE:-

5. Meenakshi had adopted Tara. **True**
6. Chandu Dhobi took good care of donkey. **True**

7. Shankar had started spending his free time with the puppies.

False

8. We pay tax for water so we can waste it as we like. **False**

Q4. CHOOSE THE CORRECT OPTION:-

5. Kaveri plays carrom with her_____.

b) sister b) **brother** c) father d) mother

6. Rainwater can be collected in_____.

b) drums b) buckets c) tanks d) **all of these**

7. father's father is our_____.

b) **grandfather** b) uncle c) cousin d) brother

8. Animals such as camel and_____ help us to carry loads.

b) Lion b) Tiger c) **Donkey** d) None of these

Q5. MATCH THE FOLLOWING:-

3. Plants and animal c) depend upon each other

4. Totaram d) studies in Mumbai

5. Cleaning water a) water purifier

6. Polar region b) Bamboo pillars

Q6. Very Short Answer Type Questions:

1. Madho's mother and sister fetch water in Madho's house?

2. Lion, Tiger, Elephant, etc.
3. During vacations, Kaveri goes to stay with her mother.
4. A group of people were related to each other is called a family.

Q7. Short Answer Type Questions:

5. Birthdays, marriage events, and festivals.
6. Spider, Cockroach, Rat, Lizards, etc.
7. People in Madha's village fetch water from a nearby pond.
8. Grace means to eat grass that is growing in a field.

Q8. Long Answer Type Questions:

2. The roof of the house is made sloping so that the rainwater collected can flow through a pipe into the tank.

4. The animals which give us something like milk, egg, honey are called domestic animals. We keep these animals at our home like cow, buffalo hen, etc.


5. We can save water by the following ways:-
 - a) We should turn off the tap while brushing
 - b) We should take bath using a bucket rather than a shower.

Q9. Give Reasons:

2. Air, Water, Food, and Shelter.
3. We learn good manners, moral values, and particular practices from our family.

Q10. Diagrams:-

3. Draw any 1 pet animal.



4. Draw a poster and write a slogan on 'Save Water'.



SHIVALIK PUBLIC SCHOOL ,MOHALI

CLASS III

SUBJECT – EVS

UNIT 10

CHAPTER-22,23,24 (LEFT-RIGHT,

A Beautiful Cloth, Web of life)

Q1:Define the following:

- a. Palm**
- b. Map**
- c. Embroidery**
- d. Texture**
- e. web**
- f. linked**

Q2. Fill in the blanks.

- 1. The earth rotates from ____ to east**
- 2. Dupatta had beautiful _____**
- 3. Cotton cloth is good to wear in _____**
- 4. We get silk from ____.**

Q3. Choose the correct option.

- 1. On a map right side shows the _____ direction.**
a) East b) West c) North d) South
- 2. In Mathematics Symbol (=) is used for_____.**
a) Addition b) Greater than c) Equal to d) subtraction
- 3. A dupatta is a long piece of cloth.**
(a) stitched (b) unstitched (c) woollen (d) None of these
- 4. All pieces of cloth have running along their length and breadth.**
(a) threads (b) strings (c) embroidery (d) None of these


Q3.Put T for True and F for false statement:

- a) In winter we wear dresses made of wool and woollen clothes.**
- b) In hot climate, dark and thick clothes are suitable.**

c) Letters are related to train.

d) We are related to house.

Q4. Match the following

1. Water	a. rainy season
2. Telephone	b. Natural
3. Rain coat	c. Man-made
4. Angarakha	d. 
5. Tree	e. Rajasthan

Q5. Answer these questions:

1. How many times will Ruchira have to take a turn on her way from home to school?

2. What fibres are clothes made of?

3. Write names of natural things.

4. Write names of man-made things.

Q6. Give Reasons:

1. Why are symbols used in a map?

2. Why do we need clothes?

Q7. Diagram:

1. Draw any two things that are needed to live

2. Draw an embroidery / pattern you see in a saree.

3. Draw different symbols used in a map.

SHIVALIK PUBLIC SCHOOL ,MOHALI

CLASS III

SUBJECT – EVS

UNIT 10

CHAPTER-22,23,24 (LEFT-RIGHT,

A Beautiful Cloth, Web of life)

Q1: Key words:

- Palm – Palm is the underside of the human hand.
- Map - A map is a drawing of an area on a flat surface.
- Embroidery- To make or fill in design with needlework.
- Texture- The way that something feels when you touch it.
- web-a complex system of interconnected elements.
- linked -connected or joined

Q2. Fill in the blanks.

- The earth rotates from **west** to east
- Dupatta had beautiful **embroidery**
- Cotton cloth is good to wear in **summers**
- We get silk from silk worm.

Q3. **Choose the correct option.**

- On a map right side shows the _____ direction.
a) East b) West c) North d) South
- In Mathematics Symbol (=) is used for _____.
a) Addition b) Greater than c) Equal to d) subtraction
- A dupatta is a long piece of cloth.
(a) stitched **(b) unstitched** (c) woollen (d) None of these
- All pieces of cloth have running along their length and breadth.
(a) threads (b) strings (c) embroidery (d) None of these

Q3.Put T for True and F for false statement:


- In winter we wear dresses made of wool and woollen clothes. [True]

b) In hot climate, dark and thick clothes are suitable. [False]

c) Letters are related to train. False

d) We are related to house. True

Q4. Match the following

1. Water	a. rainy season (3)
2. Telephone	b. Natural (1)
3. Rain coat	c. Man-made (2)
4. Angarakha	d.  (5)
5. Tree	e. Rajasthan(4)

Q5. Answer these questions:

1. Why are symbols used in a map?

Ans-Symbols are used to show locations in a map.

2. How many times will Ruchira have to take a turn on her way from home to school?

Ans. Ruchira will have to take six turns on her way from home to school.

3. What fibers are clothes made of?

Ans. Cotton, wool, silk, and jute are some natural fibres, while nylon and polyester are synthetic fibres.

4. Why do we need clothes?

Ans. We need clothes to cover ourselves and protect us from dust, rain, insects, sunlight etc.

5. Write names of natural things.

Ans- Air, mountains, water, plants, Sun, stars planets etc.

6. Write names of man-made things.

Ans- Computer, vehicles, mobile phones, homes etc.

Q6. Diagram:

1. Draw any two things that are needed to live
2. Draw an embroidery / pattern you see in a saree.
3. Draw different symbols used in a map.



Water

