

**CLASS  
V**



# FESTIVALS

A **festival** is a gathering of people to celebrate something. It can also refer to a one-day or more when people in a country have a [holiday](#) so that they can celebrate something.





### GENERAL INSTRUCTIONS

- ❖ All written work to be done in fair notebook.
- ❖ The work should be done neatly.
- ❖ Art Integrated work should be done in a separate scrap file.



## ENGLISH

1. Reading- Read any two stories from the book 'PANCHTANTRA'. Find 15 adjectives and make their sentences.
2. Vocabulary – Pick out the new words of UNIT-1 & 2 (MARIGOLD).
3. List some of the exciting and enjoyable things that you did in the summer vacation.

## HINDI

1. पक्षियों के लिए दाना तथा पानी बाहर रखें।
2. घर के अंदर तथा बाहर खेले जाने वाले किन्ही चार-चार खेलों के चित्र बनाकर नाम लिखिए।
3. विभिन्न औजारों (हथौड़ा, पेंच, आरी, साहुल, प्लास, आदि) के चित्र बनाकर उनके नाम तथा काम लिखें।
4. किसी एक संचार के साधन ( टेलीविज़न, रेडियो, समाचार पत्र आदि) चित्र बनाकर उसके बारे में कुछ पंक्तियाँ लिखें।
5. दस पृष्ठ सुलेख लिखें।
6. नए विद्यालय में पहला दिन विषय पर दो बच्चों के बीच संवाद लिखें। (REFER PAGE-126, हिन्दी व्याकरण)
7. परीक्षा में सफलता के लिए मित्र को बधाई पत्र (REFER PAGE 131, हिन्दी व्याकरण)

## PUNJABI

### ਗਰਮੀਆਂ ਦੀਆਂ ਛੁੱਟੀਆਂ ਦਾ ਕੰਮ ਪਾਲਣ ਕਰਨ ਯੋਗ ਕੁਝ ਜਰੂਰੀ ਹਿਦਾਇਤਾਂ

1. ਫਲ ਖਾਓ ਅਤੇ ਪਾਣੀ ਭਰਪੂਰ ਮਾਤਰਾ ਵਿੱਚ ਪੀਓ।
2. ਆਪਣੇ ਘਰ ਦੀ ਛੱਤ ਉੱਤੇ ਪੰਛੀਆਂ ਲਈ ਪਾਣੀ ਅਤੇ ਦਾਣਾ ਪਾਓ।
3. ਹਰ ਰੋਜ਼ ਅਖਬਾਰ ਪੜ੍ਹੋ।
4. ਸਵੇਰੇ ਉੱਠ ਕੇ ਯੋਗ ਆਸਣ ਕਰੋ।
5. ਆਪਣੇ ਮਾਤਾ ਪਿਤਾ ਦਾ ਘਰ ਦੇ ਕੰਮਾਂ ਵਿੱਚ ਹੱਥ ਵਟਾਓ।
6. ਫੋਨ ਦੀ ਵਰਤੋਂ ਘੱਟ ਕਰੋ।
7. ਛੁੱਟੀਆਂ ਦਾ ਕੰਮ ਸਾਫ ਅਤੇ ਸੁੰਦਰ ਲਿਖਾਈ ਵਿੱਚ ਕਰੋ।

### Punjabi

1. ਪੰਜ ਪੰਨੇ ਸੁਲੇਖ ਲਿਖੋ
2. ਹਰ ਰੋਜ਼ ਤਿੰਨ ਖਬਰਾਂ ਪੰਜਾਬੀ ਵਿੱਚ ਆਪਣੀ ਕਾਪੀ ਉੱਤੇ ਨੋਟ ਕਰੋ
3. ਦਸ ਹਰੀਆਂ ਸਬਜ਼ੀਆਂ ਅਤੇ ਦਸ ਗਰਮੀਆਂ ਵਿੱਚ ਆਉਣ ਵਾਲੇ ਫਲਾਂ ਦੀਆਂ ਤਸਵੀਰਾਂ ਆਪਣੇ ਪੰਜਾਬੀ ਦੀ ਕਾਪੀ ਵਿੱਚ ਚਿਪਕਾਓ ਅਤੇ ਪੰਜਾਬੀ ਵਿੱਚ ਉਹਨਾਂ ਦੇ ਨਾਮ ਲਿਖੋ।
4. ਜਾਗੋ! ਜਾਗੋ! ਹੋਇਆ ਸਵੇਰਾ ! ਕਵਿਤਾ ਦੀਆਂ 10 ਲਾਈਨਾਂ ਜਵਾਨੀ ਯਾਦ ਕਰੋ।



## MATHS

Fold and paste different types of fractions in your notebook. For reference link is given below.

<https://www.youtube.com/watch?v=4Q2NQhQr3bA>

- Learn tables 2 to 20
- Solve and write 5 puzzles and riddles each.





## EVS

- Learn chapter 1 , 2 ,and 3
- Read Chapter 4 and 5

### Activity:

- Make a snake puppet with old socks.
- Make a working model of Human digestive system using waste material available at home.

### Worksheet:

- Draw all the diagrams of Chapter-1,2,and 3.
- Make a diet chart. Include all the essential nutrients to have a balanced diet.



## COMPUTER

Make a scrap file on the topic generation of computer. Collect information regarding generations of computer and write about the same.



# ART

Make any decorative or useful piece using pista shells or mirrors.

## ART INTEGRATED HOLIDAY HOMEWORK

EVS - Make a collage on A4 size sheet and compare festivals of Odisha and Punjab.

MATHS- Write the names and dates of regional festivals of Punjab and Odisha.

ENGLISH - Draw or paste 5 pictures of festivals of Punjab and Odisha. Name them and write a few lines about them.

HINDI -उड़ीसा और पंजाब राज्य में मनाए जाने वाले किसी भी एक त्योहार के बारे में चित्र सहित लिखे - (ON DESIGNER SHEETS)

- नाम
- मनाने का ढंग
- वेश - भूषा
- महीना
- खान-पान

PUNJABI- ਪੰਜਾਬ ਅਤੇ ਉੜੀਸਾ ਵਿੱਚ ਮਨਾਏ ਜਾਣ ਵਾਲੇ ਤਿਉਹਾਰਾਂ ਦੀਆਂ ਤਸਵੀਰਾਂ ਲਗਾਓ ਅਤੇ ਉਨਾਂ ਦੇ ਨਾਮ ਪੰਜਾਬੀ ਵਿੱਚ ਲਿਖੋ(A4 sheet)

COMPUTER- Make a word document on the topic dresses of Punjab and Odisha.

GRAMMAR WORKSHEET

DO AS DIRECTED :

1. **With the knife, I cut the loaf of bread and the tomato for the sandwich.**  
(Change the singular nouns to plural.)
2. **The armies of the countries fought the wars bravely.**  
(Change the plural nouns to singular nouns.)
3. **The lady wanted a knife to cut the rope with which the goat was tied.**  
(Rewrite this sentence using the plural forms of the noun.)
4. **We went to the cinema to watch Incredibles 2**  
(Underline the common noun and circle the proper noun.)

5. Read these words and put them in correct columns given below:

Wood, actress, stranger, orphan, actor, table, countess, earl, bachelor, friend, house, wall, splinter, conductor, birds, stranger, conductress

Masculine	Feminine	Common	Neuter

6. Rewrite the following sentences after changing the gender of the underlined nouns:

- 1.) The boy is more talkative than his mother.
- 2.) There are many drakes in the pond.
- 3.) The actor played the role of a lady.
- 4.) The tiger attacked the duck.

7. Complete the following sentences using appropriate collective nouns.

- 1.A ..... of birds is always a beautiful sight.
2. They welcomed the chief guest with a ..... of flowers.
3. The .....of thieves has been arrested by the police.
4. There we saw a man carrying a ..... of clothes on his head.
5. A ..... of musicians was hired to perform at the party.
6. My friend has a fine ..... of old stamps.

8. Fill the table with synonyms for each word.

8. Fill the table with synonyms for each word.

Word	Synonyms
Listen	
Cry	
Laugh	
Speak	
Happy	
Sad	
Accept	
Give	
Divide	
Cut	

9. Rewrite these sentences using the apostrophe:

6. the book of the teacher
7. the garden of my aunt
8. the house of my friend
9. the stripes of the zebra
10. the car of my sister

10. Rewrite these sentences without using the apostrophe:

6. the teacher's book
7. my aunt's garden
8. my friend's house
9. the zebra's stripes
10. my sister's car

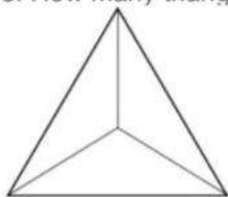
### Logical Reasoning Worksheet

1. Red ribbon is not longer than green ribbon. Green ribbon is shorter than blue ribbon. Which ribbon is the Longest?  
a. Blue ribbon    b) Red ribbon    c) Green ribbon
2. The following table shows the number of comics read by Linda and Jeff in 3 weeks.

Weeks	Linda	Jeff
1	6	6
2	9	7
3	6	8

Which of the following statements is not true?

- a. In the first two weeks Linda read more comics than Jeff.
  - b. In the last two weeks Linda and Jeff read the same number of comics.
  - c. In the first and last week together Linda read fewer comics than Jeff.
  - d. In 3 weeks Linda read fewer comics than Jeff.
3. How many months in a year have exactly 30 days?  
a. 6    b. 2    c. 5    d. 4
  4. If 'a' means '-', 'b' means '=', 'c' means '+' and 'd' means '×' then  $3 \text{ a } 6 \text{ b } 2 \text{ c } 14 \text{ d} = \underline{\hspace{2cm}}$
  5. In the following number series a wrong number is given. Find out the wrong number.  
150, 450, 750, 1060, 1350, 1650, 1950
  6. The day after the day after tomorrow is four days before Monday. What day is it today?  
a) Monday b) Tuesday c) Wednesday d) Thursday
  7. Moon : Satellite :: Earth : ?  
a) Sun    b) Planet    c) Solar System    d) Asteriod
  8. How many triangles are there in this figure ?



9. What is the weight of 2 kilograms of apples?  
a) 2 kg    b) 20 kg    c) 2000 kg    d) 4 kg
10. If it takes 15 minutes to travel from school to the park, how long will it take to travel to the park and back to school?  
a) 30 minutes    b) 45 minutes    c) 60 minutes    d) 75 minutes

11. David ran a longer distance than Ryan. Ryan ran a longer distance than Robert. Who ran

11. David ran a longer distance than Ryan. Ryan ran a longer distance than Robert. Who ran the longest distance?

12. What is  $\square + \square = 26$

a) 43   b) 19   c) 11   d) 9

13. Round 7,594 to the nearest ten.

14. Write the missing numbers  $\square$  42 49  $\square$  63  $\square$

15. If WORK is coded as 4567 and MAN 328, then WOMAN is coded as

a) 45328   b) 43528   c) 32845   d) 35428

16. Rana travels 10 km to the north, turns left and travels 4 km and then again turns right and covers another 5 km and then turns right and travels another 4 km. How far is he from the right starting point?

a) 15 km   b) 4 km   c) 5 km   d) 10 km

17. What is the product of all the numbers in the dial of a telephone?

a) 1,58,480   b) 1,59,450   c) 1,59,480   d) None of those

18. If REASON is called as 5 and BELIEVED as 7, what is the code number for GOVERNMENT?

a) 10   b) 8   c) 9   d) 6

19. Which letter will come next : J,L,N,P,R,T,\_\_\_\_\_

a. V   b. X   c. Y   d. Z

20. If you write down all the numbers from 1 to 100, then how many times do you write 3?

a) 11   b) 18   c) 20   d) 21



MENTAL MATHS WORKSHEET

1. What is the sum of 36 and 49? \_\_\_\_\_
- 2.. What is the difference between 55 and 34? \_\_\_\_\_
3. What is the product of 8 and 9? \_\_\_\_\_
4. What is the quotient of 100 divided by 10? \_\_\_\_\_
5. Balance the equation:  $4 + x = 9$ . \_\_\_\_\_
6. Which of the following is a 3-dimensional shape?  
a) Triangle b) Circle c) Cube d) Square
7. What is the weight of 2 kilograms of apples in grams?
8. If a bag of sugar weighs 1 kilogram, how many bags of sugar weigh 3000 grams?
9. How many millilitres are there in 1 litre?
10. What is  $\frac{1}{2}$  of 20?
11. What is the equivalent fraction for  $\frac{3}{4}$ ?
12. A store is open for 10 hours each day. If it opens at 9:00 am, what time will it close?  
a) 7:00 pm b) 7:30 pm c) 8:00 pm d) 8:30 pm
13. What is the time in hours if it takes 60 minutes to complete a task?
14. What is the cost of 5 items if each item costs 500 rupees?
15. What is the weight of an object that weighs 20 kg and is converted to grams?  
a) 20000 g b) 2000 g c) 200 g d) 20 g
16.  $360 \div 4 =$
17. I have a litre bottle of cola. I drank 650 ml. How much is left?
18.  $10 \times 4 = 26 +$  \_\_\_\_\_
19. I am facing north east. I turn right clockwise. What direction am I facing now?

20.  $23 - 7 \times 3 =$

21. Write the Roman numerals xxxvii in figures.

22.  $6087 \times 1000 =$

23.  $2658 \div \underline{\hspace{2cm}} = 1$

24.  $20,000 + 4000 + 20 + 7 =$

25.  $10\text{kg} = \underline{\hspace{2cm}} \text{g}$

26. The numeral form of six lakh five thousand six hundred and fifteen is

27.  $4400 + 1600 + 3000 =$

28.  $8520 - 7200 =$

29.  $42\,000 \times 4 =$

30.  $660 \div 30 =$

31.  $77\,000\text{m} = \underline{\hspace{1cm}} \text{km}$

32. Write the number names of the following:

1) 214030

2) 607089

33. Arrange the following number in descending order-a)8664831, 898717, 101385, 342610

34. Souvik was asked to write "50 lakhs, 10 thousands, 5 hundred, 2 ones", he wrote down '5010502' is this correct or incorrect. If incorrect then write the correct one.

35. Write the smallest and greatest 6 digit number by using 0,1,3,5

36. Find the smallest and greatest numbers in the following-

a)7345900, 73459, 901011, 90111

37. Which is greater  $2325/2325$  or 1?

38.  $1/7 - 1/8 =$

39. Convert the given fraction in lowest terms:

(i)  $15/600$

40.  $2/5 + 3/8 + 5/9 =$

**2 Identify the animal and write about it.**




---

---

---

---

---

---

---

---



---

---

---

---

---


---

---

---


---

---



**3 Solve the puzzle below**

1. It is a hibernating animal.
2. It can feel the vibration of the sound and hear.
3. They make different sounds to give messages to each other
4. It sleeps for two hours a day
5. It is an endangered bird
6. It has very sensitive whiskers to sense the vibration in air
7. It is killed for its Horn
8. It is killed for its tusk
9. Its musk is used to make scent
10. It is killed for its skin
11. It can rotate its neck to 270 degrees.



Class:5 Work Sheet Unit 2 A Snake Charmer's Story

Date:\_\_\_\_\_ Name:\_\_\_\_\_ Roll No:\_\_\_

Comp. Identification.

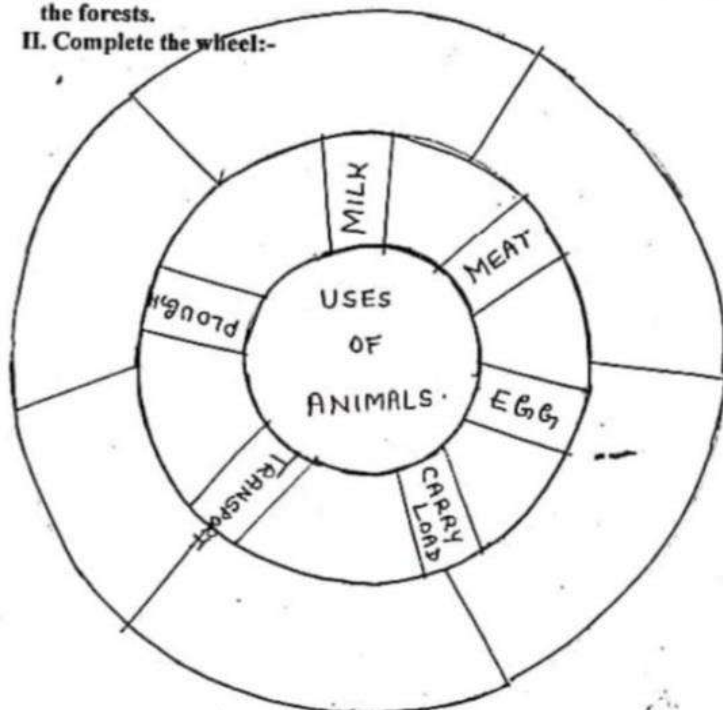
Name; \_\_\_\_\_ Roll no. \_\_\_\_\_ Time: 20 min

I. Fill in the blanks:-

bamboo, treasure, fangs, been, medicines

- Snakes dance, when the \_\_\_\_\_ is played.
- Poisonous teeth of the snakes are known as \_\_\_\_\_
- Snakes are a \_\_\_\_\_ for the snake-charmers.
- Snake charmers keep the snakes in \_\_\_\_\_ baskets.
- Snake charmers make \_\_\_\_\_ from the plants collected from the forests.

II. Complete the wheel:-



Worksheet

Topic – From Tasting to Digesting

Subject – EVS

Class -V

I. Name any 2 food items with the following tastes

1. sweet \_\_\_\_\_

2. salty \_\_\_\_\_

3. sour \_\_\_\_\_

4. bitter \_\_\_\_\_

5. spicy \_\_\_\_\_

II Describe the tastes of these food items

1. Mango chutney \_\_\_\_\_



2. Amja \_\_\_\_\_



3. Maggi \_\_\_\_\_



4. icecream \_\_\_\_\_



5. Roasted chana \_\_\_\_\_



**4. Tell me why?**

a) The grains are dried in the sun before packing:



---

---

---

b) Some food items are preserved.

---

---

---

**5. Name any two food items which can be preserved by the following methods:**

a) Sugaring : \_\_\_\_\_ , \_\_\_\_\_

b) Salting : \_\_\_\_\_ , \_\_\_\_\_

c) Drying : \_\_\_\_\_ , \_\_\_\_\_

d) Canning : \_\_\_\_\_ , \_\_\_\_\_

e) Freezing : \_\_\_\_\_ , \_\_\_\_\_

f) Pickling : \_\_\_\_\_ , \_\_\_\_\_

**6. Meena's mother wants to use some food items in the form of Bady , Pickle , Vathal , Jam , Papad. Tell her which fruit /Vegetable/pulses/grains she can select to make the above things.**

a) Bady : \_\_\_\_\_ , \_\_\_\_\_

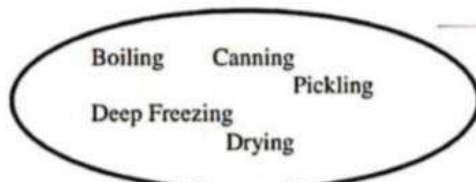
b) Vathal : \_\_\_\_\_ , \_\_\_\_\_

c) Pickle : \_\_\_\_\_ , \_\_\_\_\_

d) Jam : \_\_\_\_\_ , \_\_\_\_\_

e) Papad : \_\_\_\_\_ , \_\_\_\_\_

**7. Match the pictures with their method of preservation.**



## CREATIVE WRITING

**ENGLISH** - Write in about 150 words on the following topics:-

- a) The most special gift that you have ever received.
- b) How I spent my last vacations?
- c) What did you like the most about online classes during the lockdown and why?
- d) If you were the teacher for the day. Would you make any changes in your class? Why?

**HINDI** - निम्नलिखित विषयों पर अपने विचार 150-200 शब्दों में लिखें। (separate notebook)

1. विद्यार्थी के जीवन में खेल कूद का महत्व ।
2. जल है तो कल है।
3. समय का सदुपयोग
4. टेक्नोलॉजी के दुष्प्रभाव
5. सच्चा मित्र